






1. Vypočítej:

$$\begin{array}{r} 55 \\ - 34 \\ \hline \end{array}$$



$$\begin{array}{r} 98 \\ - 31 \\ \hline \end{array}$$



$$\begin{array}{r} 68 \\ - 40 \\ \hline \end{array}$$



$$\begin{array}{r} 35 \\ - 31 \\ \hline \end{array}$$



$$\begin{array}{r} 85 \\ - 74 \\ \hline \end{array}$$



$$\begin{array}{r} 67 \\ - 31 \\ \hline \end{array}$$


$$\begin{array}{r} 65 \\ - 31 \\ \hline \end{array}$$


$$\begin{array}{r} 28 \\ - 14 \\ \hline \end{array}$$


$$\begin{array}{r} 95 \\ - 64 \\ \hline \end{array}$$


$$\begin{array}{r} 65 \\ - 53 \\ \hline \end{array}$$


$$\begin{array}{r} 57 \\ - 22 \\ \hline \end{array}$$


$$\begin{array}{r} 89 \\ - 14 \\ \hline \end{array}$$


2. Piš, kolik korun máš zaplatit a kolik dostaneš nazpět ze stokoruny.

nakupuji	zaplatím	nazpět
$12 + 32 + 28$		
$44 + 16 + 5 + 12 + 21$		
$71 + 4 + 27$		
$3 + 12 + 52$		
$25 + 19 + 13 + 7$		

3. Doplň rozklady čísel.

